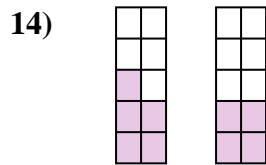
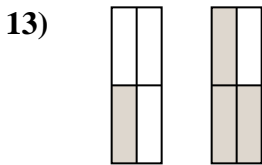
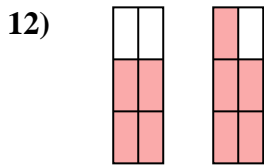
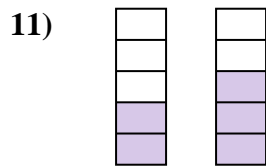
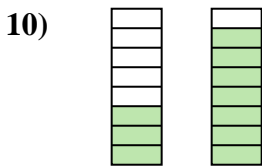
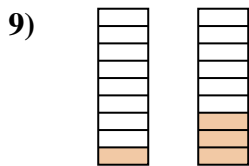
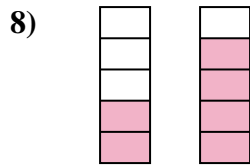
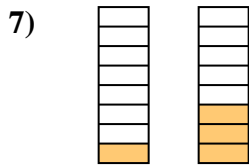
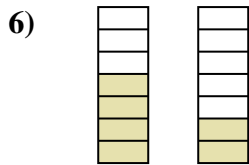
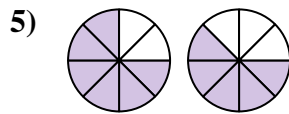
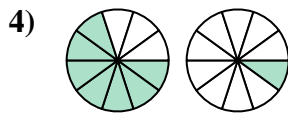
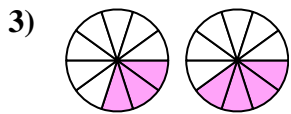
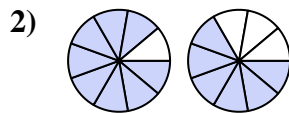
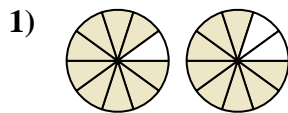
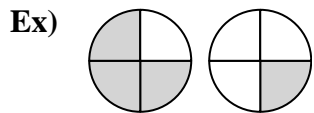




Compare the size of the fractions using $<$, $>$ or $=$.



Answers

Ex. $\frac{3}{4} > \frac{1}{4}$

1. _____

2. _____

3. _____

4. _____

5. _____

6. _____

7. _____

8. _____

9. _____

10. _____

11. _____

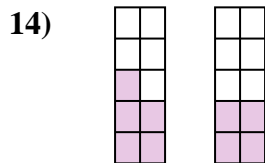
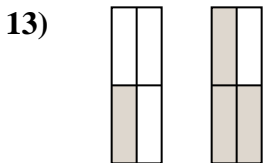
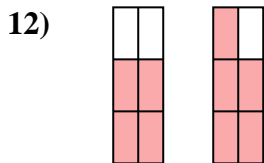
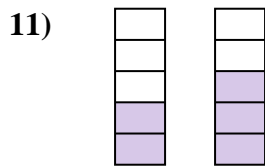
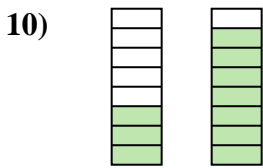
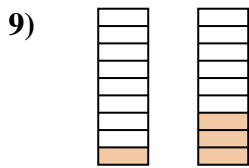
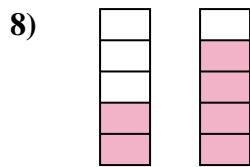
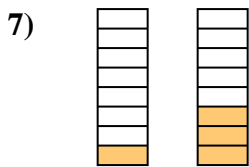
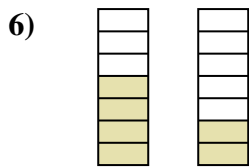
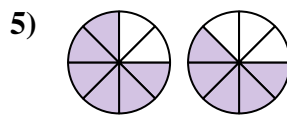
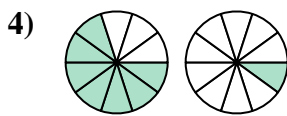
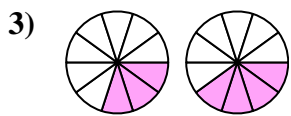
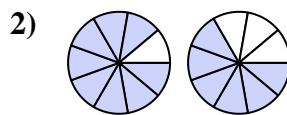
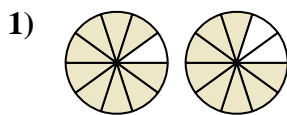
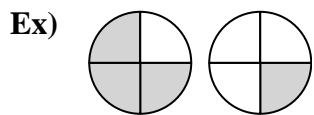
12. _____

13. _____

14. _____



Compare the size of the fractions using $<$, $>$ or $=$.



Answers

Ex. $\frac{3}{4} > \frac{1}{4}$

1. $\frac{9}{10} > \frac{8}{10}$

2. $\frac{8}{9} > \frac{6}{9}$

3. $\frac{3}{10} < \frac{4}{10}$

4. $\frac{7}{10} > \frac{1}{10}$

5. $\frac{6}{8} > \frac{5}{8}$

6. $\frac{4}{7} > \frac{2}{7}$

7. $\frac{1}{8} < \frac{3}{8}$

8. $\frac{2}{5} < \frac{4}{5}$

9. $\frac{1}{9} < \frac{3}{9}$

10. $\frac{3}{8} < \frac{7}{8}$

11. $\frac{2}{5} < \frac{3}{5}$

12. $\frac{4}{6} < \frac{5}{6}$

13. $\frac{1}{4} < \frac{3}{4}$

14. $\frac{5}{10} > \frac{4}{10}$